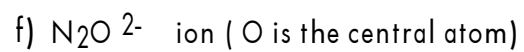
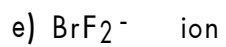
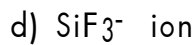
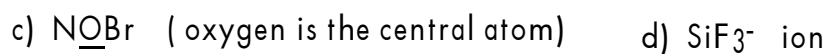
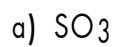


## Worksheet-Lewis Structure

1) Draw the electron- dot structure ( Lewis structure) for each of the following:



g)  $\text{SF}_4^{2-}$  ion

h)  $\text{SCl}_3^+$  ion

i)  $\text{PCl}_4^-$  ion

j)  $\underline{\text{C}}\text{H}_2\text{O}$  ( C is the central atom)